


Finding the Difference


Aim: I can calculate the difference between 2 numbers.

Find the difference between the numbers shown in each question.

1.



9

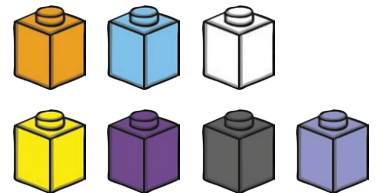


4

2.

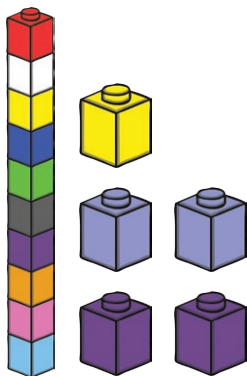


10




7

3.



15



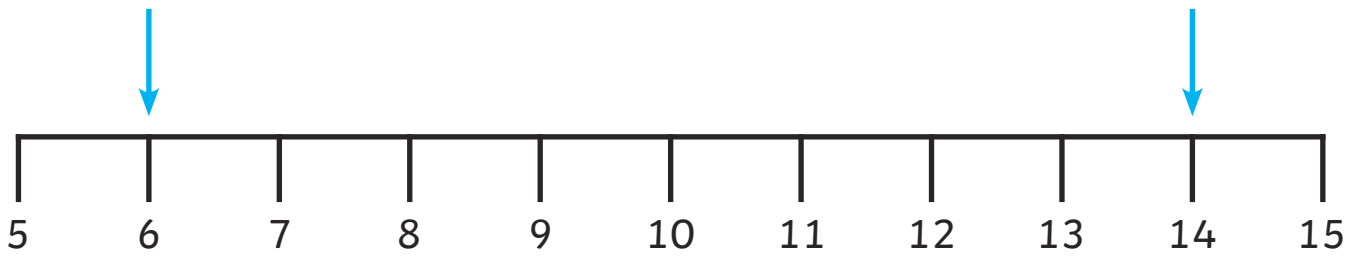
9

4.

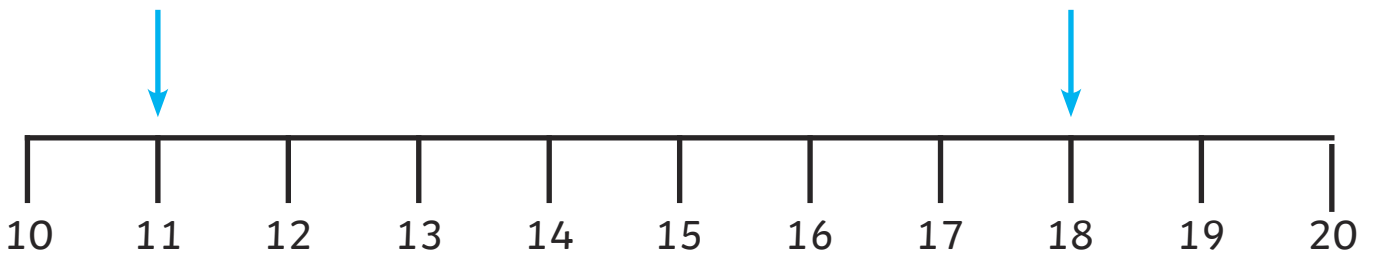


Finding the Difference

5.



6.



7. Group A has 4 children and Group B has 7 children. What is the difference between the number of children in each group?

8. Jenny has 12p and Thomas has 5p. What is the difference between the amount of money Jenny and Thomas have?

9. Mariam is 17 years old and Usman is 6 years old. What is the difference in age between Mariam and Usman?

10. William weighs 2 empty boxes. One weighs 19g and the other weighs 12g. What is the difference between the mass of each box?

Finding the Difference

Answers

1. **5**

2. **3**

3. **6**

4. **4**

5. **8**

6. **7**

7. **3 children**

8. **7p**

9. **11 years**

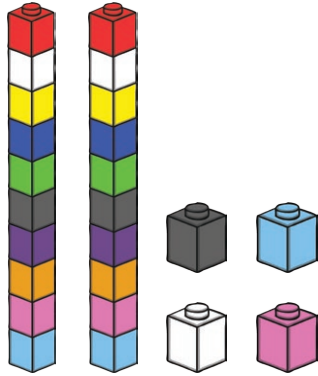
10. **7g**

Finding the Difference


Aim: I can calculate the difference between 2 numbers.

Find the difference between the numbers shown in each question.

1.




24




13

2.

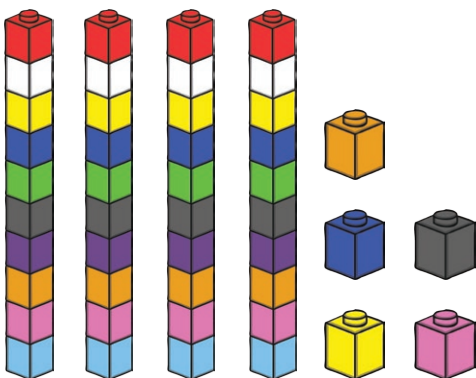


37




14

3.



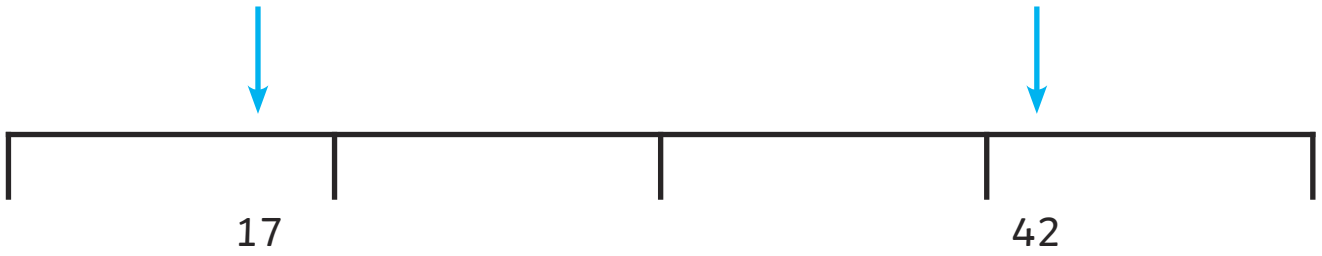
45



37

Finding the Difference

4.



5.



6.



7. Class A has 29 children and Class B has 24 children. What is the difference between the number of children in each class?

8. Jenny has 72p and Thomas has 45p. What is the difference between the amount of money Jenny and Thomas have?

Finding the Difference

9. Mariam is 99cm tall and Usman is 84cm tall. What is the difference in height between Mariam and Usman?

10. William weighs 2 bags of soil. One weighs 34g and the other 87g. What is the difference between the mass of each bag?

Finding the Difference

Answers

1. **11**

2. **23**

3. **8**

4. **25**

5. **42**

6. **17**

7. **5 children**

8. **27p**

9. **15cm**

10. **53g**

Finding the Difference

Aim: I can calculate the difference between 2 numbers.

Find the difference between the numbers shown in each question.

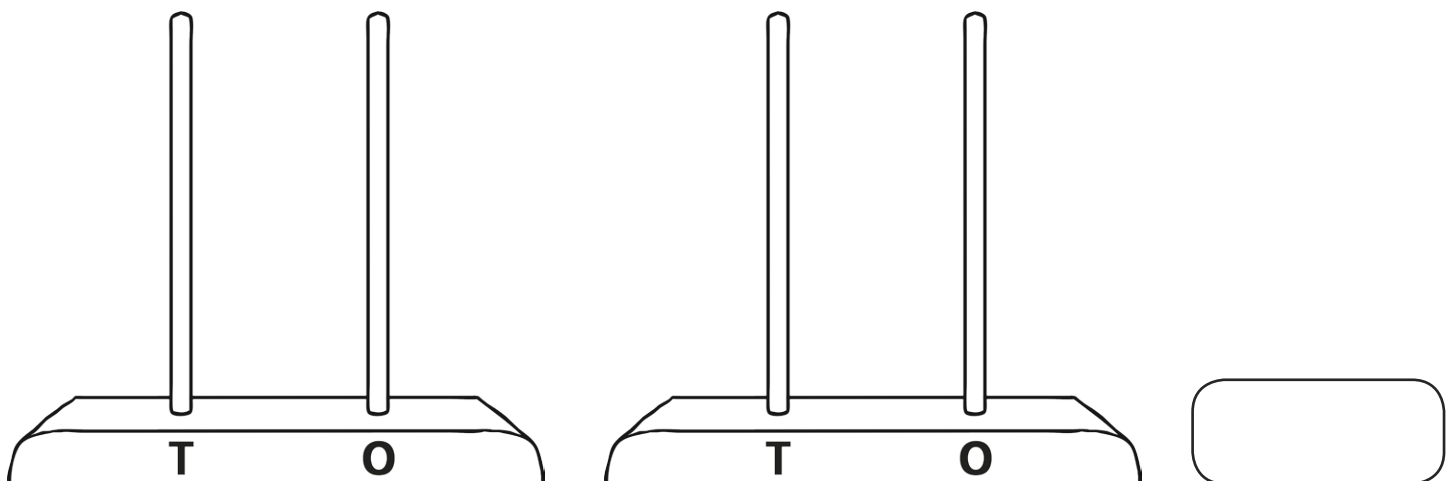
1. Draw tens and ones to find the difference between 32 and 65.



2. Draw tens and ones to find the difference between 57 and 91.

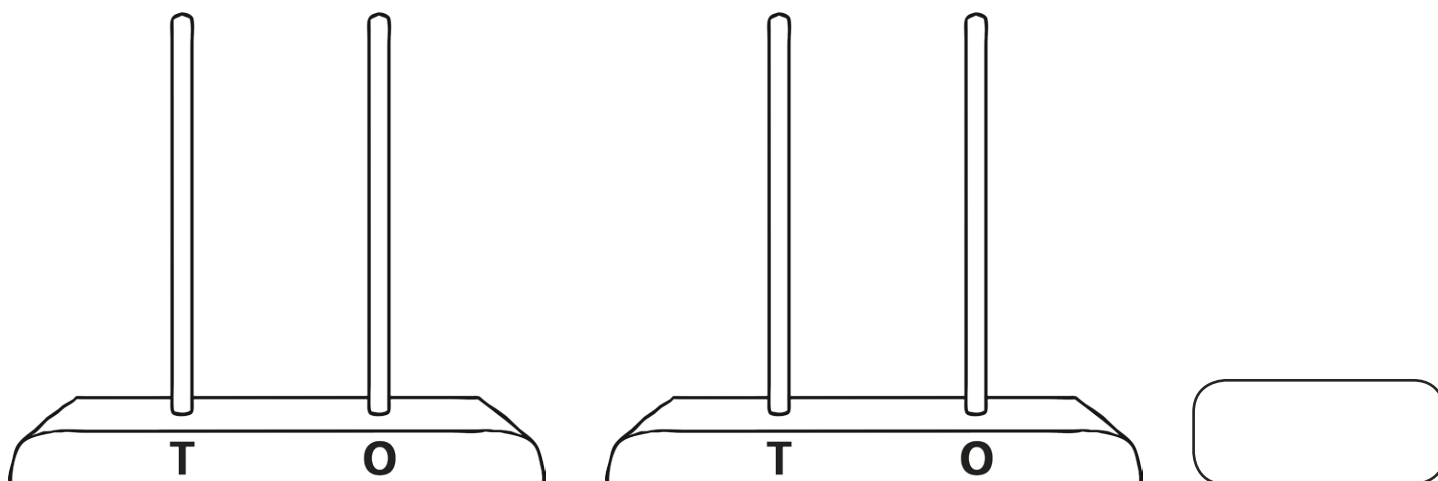


3. Draw beads on these abacuses to find the difference between 26 and 53.



Finding the Difference

4. Draw beads on these abacuses to find the difference between 18 and 75.




Use these blank number lines to find the difference between:

5. 34 and 87



6. 29 and 91



7. There are 29 children in year 1 and 46 children in year 2. What is the difference between the number of children in each year group?



8. Jenny has 92p and Thomas has 14p. What is the difference between the amount of money Jenny and Thomas have?



Finding the Difference

9. There are 2 bowls of marbles. The difference between the number of marbles in each bowl is 24 marbles. One bowl has twice as many marbles as the other. How many marbles are there in each bowl?

10. William weighs 2 bags of soil. The difference between the mass of each bag is 34g and the total in both bags is 98g. What is the mass of each bag?

Finding the Difference

Answers

1. **33**

2. **34**

3. **27**

4. **57**

5. **53**

6. **62**

7. **17 children**

8. **78p**

9. **24 and 48**

10. **32g**